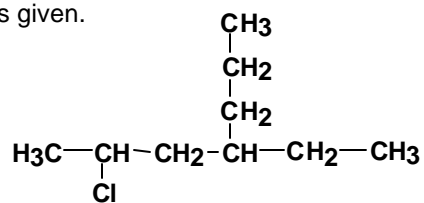
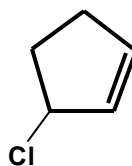


Write the correct IUPAC name for the structures given.

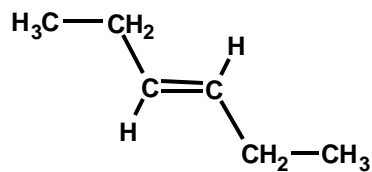
1) _____



2) _____



3) _____



Draw the structures of the compounds below. Show all carbon to carbon bonds (as in structures of 1-3 above). Bonds to Hydrogen are optional.

4) 1-bromo-3-ethylcyclohexane

5) 2-methylpropane