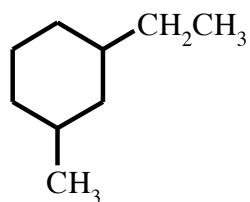
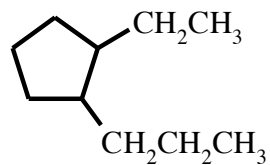


## Cycloalkane Nomenclature

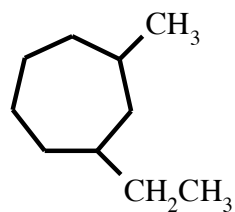
1. Name the following compound



2. Name the following compound



3. Name the following compound



4. Draw the structure of 1,2 diethylcyclobutane

5. Draw the structure of 1,2,3-trimethylcyclohexane